



INDIAN SCHOOL AL WADI AL KABIR

DEPARTMENT OF MATHEMATICS (2023 – 2024)

TOPIC: NUMBER CONCEPTS

RECALL WORKSHEET

RESOURCE PERSON: Ms. Mariyam L

(ANSWER KEY)

NAME: _____ CLASS: II SEC: _____ DATE: _____

Q1. Write the number names for the given numbers. Do not forget to begin the number name with a capital letter.

a.




b.



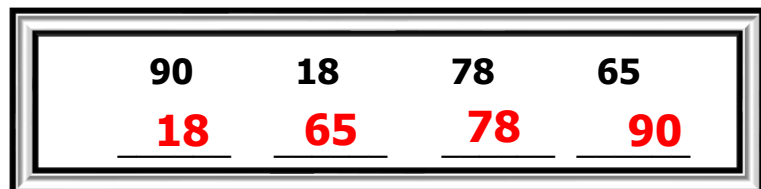
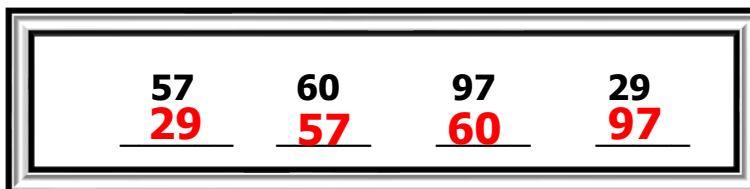
c.



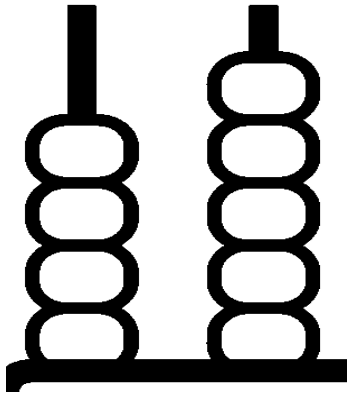
Q2. Write the numbers that comes before and after the given numbers.



Q3. Arrange the numbers in ascending order.




Q4. Identify the number shown on the abacus and expand it in two ways.



Number - 45

$$\begin{aligned} \underline{45} &= \underline{4} \text{ Tens} + \underline{5} \text{ Ones} \\ &= \underline{40} + \underline{5} \end{aligned}$$

Q5. Tick the ball with the smallest number and colour the ball with the biggest number from the following set of numbers.



Q6. Arrange the numbers in descending order.

